

Reading Mrs. S. Rivera



©Toons4Biz \* illustrationsOl.com/7803

Reading Day 12

Let's read from RAZ KIDS

Use your log in and have fun reading!

Reading Mrs. S. Rivera

## Grade 2 - S. Rivera Writing Class


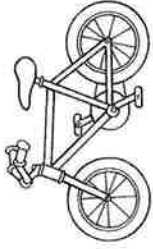



Day 12 - Select one writing activity from the **THIRD** row of the calendar.

Complete it on the highlighted paper included.

- Write 3-5 sentences
- Be sure to check capitalization and punctuation
- Use C.U.P.S. to edit your sentences.

**\*\*Today I may make mistakes, but I will always do the BEST that I can do!**

# Writing Prompts

Sunday	Monday	Tuesday	Wednesday	Thursday	Friday	Saturday
<b>1</b> Write about your best holiday experience. What made it so great?	<b>2</b> Go outside and write about the sounds you hear.	<b>3</b> If I were seven feet tall, I would...	<b>4</b> One thing I wonder about my teacher is...	<b>5</b> Imagine drinking something that makes you invisible. Describe your adventures.	<b>6</b> If I had a pet skunk, I would...	<b>7</b> If you were a teacher for the day, how would your class be different?
<b>8</b> I feel happy when...	<b>9</b> Write about the strangest dream you ever had.	<b>10</b> Think of someone you look up to. What do you admire about that person and why?	<b>11</b> Your bike begins to disappear as you ride down the street. You squeeze the brakes, but they don't work! What do you do?	<b>12</b> You go to the zoo and discover they have a new exhibit for imaginary animals. Write about your visit.	<b>13</b> If I could have a superpower, I would want the ability to...	<b>14</b> Describe a garden to someone who has never seen flowers.
<b>15</b> If I could talk to animals, I would...	<b>16</b> Write an adventure story about the day you found a magical four-leaf clover.	<b>17</b> A leprechaun grants you three wishes. What do you wish for?	<b>18</b> If I could grow anything in my backyard, I would grow...	<b>19</b> It's the first day of spring! Write about everything that comes to mind when you think of spring.	<b>20</b> As I opened the ancient treasure chest, I was shocked to discover...	<b>21</b> Describe your favorite food using all five senses.
<b>22</b> Write about a bird that grows up in a cage. One day, her owners set her free and...	<b>23</b> If you could meet a famous person from the past or present, whom would you meet and why?	<b>24</b> I accidentally ate watermelon seeds and felt funny. I looked in the mirror and...	<b>25</b> Write a story about a house you thought was empty—but actually wasn't!	<b>26</b> Write out your favorite jokes.	<b>27</b> What is your favorite activity and why?	<b>28</b> Imagine you are an ant. How do you see the world?
<b>29</b> Would you rather play baseball, go to a baseball game or watch baseball on TV? Explain.	<b>30</b> When I hear a song that I really like, the music makes me feel...	<b>31</b> You wake up and look in the mirror to discover you are now an adult! Write about your day.				
						

# Writing Assignments

## Writing Prompts

Day \_\_\_\_\_

Grade 2 - S. Rivera Math Class

Day 12- Directions complete boxes



1 Use your centimeter ruler.  
Measure the length of this line segment:



Fill in the bubble next to the correct answer.

- About 7 centimeters
- About 6 centimeters
- About 8 centimeters
- About 10 centimeters

104

2 Write the time.



\_\_\_\_\_

106-107

3 You buy an apple for 45¢. You pay with a dollar. How much change will you get?

\_\_\_\_\_¢

4 Write a number with 5 in the hundreds place, 0 in the ones place, and 3 in the tens place.

\_\_\_\_\_

73

5 You can make 45¢ with 1 Ⓞ and \_\_\_\_\_ Ⓣ.

You can make 60¢ with

3 Ⓣ and \_\_\_\_\_ Ⓞ.

110-111

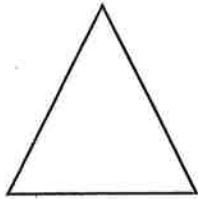
6 Write the number word for 405.

\_\_\_\_\_

## Practice Set 72

Day 42

①



This triangle has:

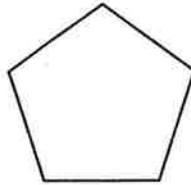
\_\_\_\_\_ sides

\_\_\_\_\_ angles

\_\_\_\_\_ vertices

\_\_\_\_\_ pairs of  
parallel sides

②



This pentagon has:

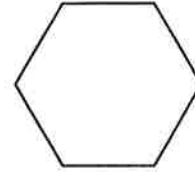
\_\_\_\_\_ sides

\_\_\_\_\_ angles

\_\_\_\_\_ vertices

\_\_\_\_\_ pairs of  
parallel sides

③



This hexagon has:

\_\_\_\_\_ sides

\_\_\_\_\_ angles

\_\_\_\_\_ vertices

\_\_\_\_\_ pairs of  
parallel sides

- ④ **Writing/Reasoning** Pick two of the shapes above. Say one way they are alike and one way they are different.

---



---



---



---

Write each number in expanded form.

⑤ 673 \_\_\_\_\_

⑥ 205 \_\_\_\_\_

- ⑦ Circle all the odd numbers.

76      153      34      8      399

551      1      997      346      321