

Reading Mrs. S. Rivera



©Toons4Biz \* illustrationsOf.com/7803

Reading Day 11

Let's read from RAZ KIDS

Use your log in and have fun reading!

## Grade 2 - S. Rivera Writing Class




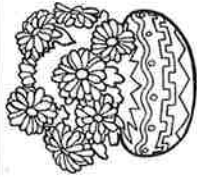

Day 11 - Select one writing activity from the THIRD row of the calendar.

Complete it on the highlighted paper included.

- Write 3-5 sentences
- Be sure to check capitalization and punctuation
- Use C.U.P.S. to edit your sentences.

\*\*Today I may make mistakes, but I will always do the BEST that I can do!

# Writing Prompts

Sunday	Monday	Tuesday	Wednesday	Thursday	Friday	Saturday
<b>1</b> Write about your best holiday experience. What made it so great?	<b>2</b> Go outside and write about the sounds you hear.	<b>3</b> If I were seven feet tall, I would...	<b>4</b> One thing I wonder about my teacher is...	<b>5</b> Imagine drinking something that makes you invisible. Describe your adventures.	<b>6</b> If I had a pet skunk, I would...	<b>7</b> If you were teacher for the day, how would your class be different?
<b>8</b> I feel happy when...	<b>9</b> Write about the strangest dream you ever had.	<b>10</b> Think of someone you look up to. What do you admire about that person and why?	<b>11</b> Your bike begins to disappear as you ride down the street. You squeeze the brakes, but they don't work! What do you do?	<b>12</b> You go to the zoo and discover they have a new exhibit for imaginary animals. Write about your visit.	<b>13</b> If I could have a superpower, I would want the ability to...	<b>14</b> Describe a garden to someone who has never seen flowers.
<b>15</b> If I could talk to animals, I would...	<b>16</b> Write an adventure story about the day you found a magical four-leaf clover.	<b>17</b> A leprechaun grants you three wishes. What do you wish for?	<b>18</b> If I could grow anything in my backyard, I would grow...	<b>19</b> It's the first day of spring! Write about everything that comes to mind when you think of spring.	<b>20</b> As I opened the ancient treasure chest, I was shocked to discover...	<b>21</b> Describe your favorite food using all five senses.
<b>22</b> Write about a bird that grows up in a cage. One day, her owners set her free and...	<b>23</b> If you could meet a famous person from the past or present, whom would you meet and why?	<b>24</b> I accidentally ate watermelon seeds and felt funny. I looked in the mirror and...	<b>25</b> Write a story about a house you thought was empty—but actually wasn't!	<b>26</b> Write out your favorite jokes.	<b>27</b> What is your favorite activity and why?	<b>28</b> Imagine you are an ant. How do you see the world?
<b>29</b> Would you rather play baseball, go to a baseball game or watch baseball on TV? Explain.	<b>30</b> When I hear a song that I really like, the music makes me feel...	<b>31</b> You wake up and look in the mirror to discover you are now an adult! Write about your day.				
						

# Writing Assignments

## Writing Prompts

Day \_\_\_\_\_

Grade 2 - S. Rivera Math Class




Day 11- Directions Telling Time/ Addition

- Each review sheet has an example completed to help you get started.
- Flat = hundred  
Long = ten  
Cube = one



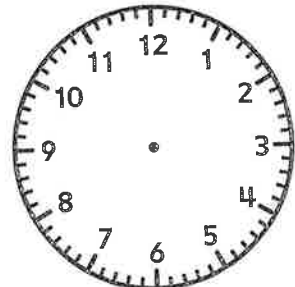
Look at the example to check your work.



Write the time.

 <p>_____ : _____</p>	 <p>_____ : _____</p> <p>What time will it be in 1 hour?</p> <p>_____ : _____</p>	 <p>_____ : _____</p> <p>What time will it be in 2 hours?</p> <p>_____ : _____</p>
--	--	---

Draw clock hands to match each time.

 <p>1:00</p>	 <p>3:30</p>	 <p>4:30</p>
---	---	---

**Try This**

● My family went to a movie. It started at 7:30 at night. It ended at 9:30 at night. How long was the movie? \_\_\_\_\_

Explain how you found your answer. \_\_\_\_\_

\_\_\_\_\_

\_\_\_\_\_

1 Count back by 10s.

113, \_\_\_\_\_, \_\_\_\_\_, 83, \_\_\_\_\_,  
 \_\_\_\_\_, 53

2 Write the number word for 8.

\_\_\_\_\_

3 Write  $<$ ,  $>$ , or  $=$ .

$4 + 4$  \_\_\_\_\_  $5 + 4$

$7 + 7$  \_\_\_\_\_  $8 + 6$

$9 + 8$  \_\_\_\_\_  $8 + 8$



4 **Writing/Reasoning** In Problem 1, count back by 10s five more times. What patterns do you see?

\_\_\_\_\_

\_\_\_\_\_

\_\_\_\_\_

