

Grade 2 - S. Rivera Reading Class

Day 7- Directions

- Read the passage from Read Works "A Gold Sheep"



- Retell the passage to someone, even if it's yourself, family pet, or a friend.
- Reread the text again. This time scoop your sentences, add more expression, and read with a louder voice.
- Answer the response questions.
- Lastly, edit your writing using C.U.P.S. strategy

Enjoy the passage and make a connection.

A Gold Sheep

by Kyria Abrahams



Jared and his family are going to the petting zoo. Jared is nervous. What if one of the animals bites him?

"The animals won't bite as long as you are nice to them," Mom says.

"I'm always nice to animals," says Jared.

When they get to the zoo, he sees all kinds of animals. There are chickens and lambs. There is a goat and a cow.

Jared puts a nickel in a dispenser. A big handful of animal pellets comes out. They smell like dirty socks. He holds the pellets up to a goat, and the goat grabs them with its tongue. The tongue is soft, and it tickles Jared's hand.

"Ah!" Jared yells and jumps back from the goat.

"Bleeeeeeeet!" says the goat. It wants more food. Jared doesn't have any more food to give it.

Jared keeps walking backward until he feels something fluffy against the back of his legs. A whole flock of sheep is standing together.

"Baaaaaaah!" the sheep say. They are looking for food from Jared, too.

One of the sheep is a little different from the others. It's a black sheep.

Jared walks up to the funny animal. Suddenly, the sheep's face turns gold.

"Why do you have a gold face?" he asks the sheep.

"Why do you have a brown face?" the sheep asks.

"Because that's the color of my skin!" Jared says. Suddenly, he realizes the sheep is talking. "Hey! You can talk!"

"Only you can hear me," says the sheep. "And only you can see my true color."

At this, the whole sheep magically turns bright gold.

"Let me introduce myself. I am Gael, the sacred gold sheep. I live in shame."

"Why are you ashamed? You are beautiful!"

"I cannot show my true self to the other sheep," he says.

"Why not?"

"They won't accept me with my gold face," says Gael.

Jared couldn't believe this. The other sheep seemed nice-just hungry.

He takes a nickel from his pocket. He gets more smelly treats and walks over to the other sheep.

"Little boy, have you brought us food?" asks the biggest sheep.

"I have," says Jared. "But first, I have a question."

"You can address it to me," says the biggest sheep. "I am the leader, Conrad."

"Conrad, are any of you...gold?"

All the sheep begin to laugh.

"Clearly we are not gold, silly boy," says Conrad. "You can see our colors."

"What if one of your sheep was *secretly* gold?"

"Secretly gold? We would never accept that! That sheep would be a black sheep," Conrad says, laughing at his own joke.

Gael, the gold sheep, is standing alone on the other side of the petting zoo. He hears every word Conrad says. He begins to cry gold tears. As the tears fall to the ground, little gold flowers begin to grow.

"Look!" says Jared, pointing. "There is your gold sheep. He is making gold flowers grow!"

"Ohhh!" all the other sheep gasp. "They are beautiful."

Jared walks to Gael. He picks a couple of the flowers. Conrad, the leader, eats one flower from Jared's hand.

"This is delicious!" he exclaims.

All around Gael, beautiful gold flowers have grown. Gael himself is glowing gold.

"Behold!" says Gael. "My true form!"

Conrad stares at Gael for a very long time.

"I accept you," Conrad finally says. "I wasn't right to think there's something wrong with a gold sheep. You have made the most beautiful flowers with your magic."

"Thank you, Jared," says Gael. "I have a family again."

"Jared!" Jared's mother shouts, calling for him. "It's time to go home!"

"I have to go!" Jared says, running back to his mother.

"Did you enjoy feeding the animals at the petting zoo today?" Mom asks.

"More than you'll ever know!" says Jared.

In his hand is a beautiful gold flower. Jared knows he will always remember this day. He will never forget that being different can also be beautiful.

Name: _____ Date: _____

1. Where do Jared and his family go in the story?

- A. the shopping mall
- B. the petting zoo
- C. the aquarium

2. What problem does Gael, the gold sheep, face?

- A. He thinks the other sheep won't accept his gold face.
- B. When he cries, gold flowers grow from where his tears fall.
- C. He does not get enough food because no one feeds gold sheep.

3. Gael is a magical sheep. What evidence from the text supports this conclusion?

- A. Conrad, the leader, thinks the gold flowers are delicious.
- B. When Gael cries, gold flowers grow from where his tears fall.
- C. Gael lives in shame, and he cannot show his true self to the other sheep.

4. Read these sentences from the text.

"Secretly gold? We would never accept that! That sheep would be a black sheep," Conrad says, laughing at his own joke.

Gael, the gold sheep, is standing alone on the other side of the petting zoo. He hears every word Conrad says. He begins to cry gold tears.

Based on this information, how does Gael feel?

- A. proud that he is gold and different from the others
- B. hungry for more animal pellets from Jared
- C. sad that the sheep would not accept him

5. What is the main message of this story?

- A. Being different can also be beautiful.
- B. Trips to the petting zoo can teach you things.
- C. Gold sheep are better than white or black sheep.

6. Read these sentences from the text.

"Look!" says Jared, pointing. "There is your gold sheep. He is making gold flowers grow!"

"Ohhh!" all the other sheep gasp. "They are beautiful."

As used in the sentence, what does the word **"gasp"** mean?

- A. run away in fear from something
- B. make a noise from being surprised
- C. make a noise in disgust

7. Choose the answer that best completes the sentence below.

Gael thinks the other sheep would reject him if they knew his true color, _____ he hides his true form from others.

- A. but
- B. like
- C. so

8. What is Gael's true color?

9. What does Conrad say when Jared asks, "What if one of your sheep was *secretly* gold?"

10. How do Conrad's feelings towards a gold sheep change in the story? What makes his feelings change? Use evidence from the story to support your answer.

Grade 2 - S. Rivera Writing Class






Day 7- Select one writing activity from the **SECOND** row of the calendar.

Complete it on the highlighted paper included.

- Write 3-5 sentences
- Be sure to check capitalization and punctuation
- Use C.U.P.S. to edit your sentences.

****Today I may make mistakes, but I will always do the BEST that I can do!**


Writing Prompts

Sunday	Monday	Tuesday	Wednesday	Thursday	Friday	Saturday
<p>1 Write about your best holiday experience. What made it so great?</p>	<p>2 Go outside and write about the sounds you hear.</p>	<p>3 If I were seven feet tall, I would...</p>	<p>4 One thing I wonder about my teacher is...</p>	<p>5 Imagine drinking something that makes you invisible. Describe your adventures.</p>	<p>6 If I had a pet skunk, I would...</p>	<p>7 If you were teacher for the day, how would your class be different?</p>
<p>8 I feel happy when...</p>	<p>9 Write about the strangest dream you ever had.</p>	<p>10 Think of someone you look up to. What do you admire about that person and why?</p>	<p>11 Your bike begins to disappear as you ride down the street. You squeeze the brakes, but they don't work! What do you do?</p>	<p>12 You go to the zoo and discover they have a new exhibit for imaginary animals. Write about your visit.</p>	<p>13 If I could have a superpower, I would want the ability to...</p>	<p>14 Describe a garden to someone who has never seen flowers.</p>
<p>15 If I could talk to animals, I would...</p>	<p>16 Write an adventure story about the day you found a magical four-leaf clover.</p>	<p>17 A leprechaun grants you three wishes. What do you wish for?</p>	<p>18 If I could grow anything in my backyard, I would grow...</p>	<p>19 It's the first day of spring! Write about everything that comes to mind when you think of spring.</p>	<p>20 As I opened the ancient treasure chest, I was shocked to discover...</p>	<p>21 Describe your favorite food using all five senses.</p>
<p>22 Write about a bird that grows up in a cage. One day, her owners set her free and...</p>	<p>23 If you could meet a famous person from the past or present, whom would you meet and why?</p>	<p>24 I accidentally ate watermelon seeds and felt funny. I looked in the mirror and...</p>	<p>25 Write a story about a house you thought was empty—but actually wasn't!</p>	<p>26 Write out your favorite jokes.</p>	<p>27 What is your favorite activity and why?</p>	<p>28 Imagine you are an ant. How do you see the world?</p>
<p>29 Would you rather play baseball, go to a baseball game or watch baseball on TV? Explain.</p>	<p>30 When I hear a song that I really like, the music makes me feel...</p>	<p>31 You wake up and look in the mirror to discover you are now an adult! Write about your day.</p>				
						

Writing Assignments

Writing Prompts

Day _____



Grade 2 - S. Rivera Math Class

Day 7- Directions Telling Time/Addition Shark Attacks/Adding Ten/ or pick The Snack Shack

- Each review sheet has an example completed to help you get started.
- Flat = hundred
Long = ten
Cube = one

Look at the example to check your work.

Name: _____

Telling Time

ex.



What time is it?

- ten minutes after five
- ten minutes after four
- fifteen minutes after five



What time is it?

- twenty-five minutes after nine
- twenty-five minutes to eight
- twenty-five minutes after eight



What time is it?

- ten minutes to ten
- ten minutes to eleven
- ten minutes after ten



What time is it?

- twenty-five minutes to eight
- twenty-five minutes to seven
- twenty-five minutes after eight



What time is it?

- twenty minutes to nine
- twenty-five minutes to nine
- twenty minutes after nine



What time is it?

- ten minutes to six
- five minutes to seven
- five minutes after six



What time is it?

- five minutes after ten
- five minutes to eleven
- five minutes after twelve



What time is it?

- twenty-five minutes to six
- twenty-five minutes after five
- twenty minutes after five



What time is it?


- twenty minutes to twelve
- twenty minutes to eleven
- twenty minutes after twelve

Name: _____

3-Digit Addition (no regrouping)

Addition Shark Attack

Add to find the sums. Then solve the riddle by matching the letters to the blank lines below.



A $\begin{array}{r} 321 \\ +122 \\ \hline 443 \end{array}$
S $\begin{array}{r} 561 \\ +128 \\ \hline 689 \end{array}$
L $\begin{array}{r} 943 \\ + 36 \\ \hline \end{array}$

ex.

W $\begin{array}{r} 453 \\ +543 \\ \hline \end{array}$
E $\begin{array}{r} 621 \\ +176 \\ \hline \end{array}$
D $\begin{array}{r} 334 \\ +621 \\ \hline \end{array}$

L $\begin{array}{r} 741 \\ +245 \\ \hline \end{array}$
T $\begin{array}{r} 400 \\ + 54 \\ \hline \end{array}$
L $\begin{array}{r} 321 \\ +623 \\ \hline \end{array}$
E $\begin{array}{r} 532 \\ +326 \\ \hline \end{array}$
W $\begin{array}{r} 509 \\ +220 \\ \hline \end{array}$

A $\begin{array}{r} 534 \\ +415 \\ \hline \end{array}$
O $\begin{array}{r} 330 \\ +634 \\ \hline \end{array}$
H $\begin{array}{r} 820 \\ + 64 \\ \hline \end{array}$
E $\begin{array}{r} 686 \\ +113 \\ \hline \end{array}$
R $\begin{array}{r} 143 \\ +223 \\ \hline 366 \end{array}$

What is a shark's favorite game?

689 729 949 979 986 964 996

454 884 797 944 858 A 443 955 799 R 366

* Pick Adding 10 Day 7
or Next Sheet

Name: _____

Adding 10

The Snack Shack

a. $\underline{3}7 + 10 = \underline{47}$

b. $23 + 10 = \underline{\quad}$

c. $10 + 18 = \underline{\quad}$

d. $40 + 10 = \underline{\quad}$

e. $76 + 10 = \underline{\quad}$

f. $10 + 7 = \underline{\quad}$

g. $10 + 82 = \underline{\quad}$

h. $14 + 10 = \underline{\quad}$

i. $55 + 10 = \underline{\quad}$

j. $10 + 63 = \underline{\quad}$

k. $62 + 10 = \underline{\quad}$

l. $19 + 10 = \underline{29}$

m. $\underline{44} = 34 + 10$

n. $\underline{\quad} = 10 + 28$

o. $\underline{\quad} = 10 + 86$

p. $\underline{\quad} = 77 + 10$

$$\begin{array}{r} q. \quad 45 \\ + 10 \\ \hline \underline{55} \end{array}$$

$$\begin{array}{r} r. \quad 10 \\ + 58 \\ \hline \end{array}$$

$$\begin{array}{r} s. \quad 71 \\ + 10 \\ \hline \end{array}$$

$$\begin{array}{r} t. \quad 90 \\ + 10 \\ \hline \end{array}$$

$$\begin{array}{r} u. \quad 80 \\ + 10 \\ \hline \end{array}$$

$$\begin{array}{r} v. \quad 10 \\ + 48 \\ \hline \end{array}$$

$$\begin{array}{r} w. \quad 3 \\ + 10 \\ \hline \end{array}$$

$$\begin{array}{r} x. \quad 33 \\ + 10 \\ \hline \end{array}$$

★ y. $27 + \underline{\quad} = 37$

★ z. $\underline{\quad} + 10 = 64$

