

Reading Mrs. S. Rivera



©Toons4Biz * illustrationsOf.com/7803

Reading Day 15

Let's read from RAZ KIDS

Use your log in and have fun reading!

Reading Mrs. S. Rivera

Grade 2 - S. Rivera Writing Class

Day 15 - FREE CHOICE




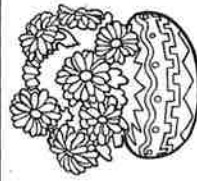
Write 3-5 sentences about anything you were doing that was fun!

Complete it on the highlighted paper included.

- Write 3-5 sentences
- Be sure to check capitalization and punctuation
- Use C.U.P.S. to edit your sentences.

****Today I may make mistakes, but I will always do the BEST that I can do!**

Writing Prompts

Sunday	Monday	Tuesday	Wednesday	Thursday	Friday	Saturday
1 Write about your best holiday experience. What made it so great?	2 Go outside and write about the sounds you hear.	3 If I were seven feet tall, I would...	4 One thing I wonder about my teacher is...	5 Imagine drinking something that makes you invisible. Describe your adventures.	6 If I had a pet skunk, I would...	7 If you were teacher for the day, how would your class be different?
8 I feel happy when...	9 Write about the strangest dream you ever had.	10 Think of someone you look up to. What do you admire about that person and why?	11 Your bike begins to disappear as you ride down the street. You squeeze the brakes, but they don't work! What do you do?	12 You go to the zoo and discover they have a new exhibit for imaginary animals. Write about your visit.	13 If I could have a superpower, I would want the ability to...	14 Describe a garden to someone who has never seen flowers.
15 If I could talk to animals, I would...	16 Write an adventure story about the day you found a magical four-leaf clover.	17 A leprechaun grants you three wishes. What do you wish for?	18 If I could grow anything in my backyard, I would grow...	19 It's the first day of spring! Write about everything that comes to mind when you think of spring.	20 As I opened the ancient treasure chest, I was shocked to discover...	21 Describe your favorite food using all five senses.
22 Write about a bird that grows up in a cage. One day, her owners set her free and...	23 If you could meet a famous person from the past or present, whom would you meet and why?	24 I accidentally ate watermelon seeds and felt funny. I looked in the mirror and...	25 Write a story about a house you thought was empty—but actually wasn't!	26 Write out your favorite jokes.	27 What is your favorite activity and why?	28 Imagine you are an ant. How do you see the world?
29 Would you rather play baseball, go to a baseball game or watch baseball on TV? Explain.	30 When I hear a song that I really like, the music makes me feel...	31 You wake up and look in the mirror to discover you are now an adult! Write about your day.				

Writing Assignments

Writing Prompts

Day

Mrs. S. Rivera Math

Day 15th

Complete sheet Practice Set 77

Complete 47

You're doing great!!!!!!!!!!!!!!!



Practice Set 77

Day 15

Draw a picture to solve each problem. Then solve.

- ① There were 4 people at the lunch table. Each person ate 3 apples each. How many apples did they eat in all?

_____ apples

- ② There were 4 leaves. There were 6 bugs on each leaf. How many bugs were there in all?

_____ bugs

Draw an array to help you solve each problem. Then solve.

- ③ Mary arranged her muffins into 3 rows with 10 muffins in each row. How many muffins did Mary have?

_____ muffins

- ④ The chairs in the auditorium were arranged into 7 rows with 8 chairs in each row. How many chairs were there in all?
(Use X to stand for a chair in your array.)

_____ chairs

Practice Set 47

Day 15

Add.

- ① $5 + 10 = \underline{\quad}$ ② $23 + 10 = \underline{\quad}$ ③ $145 + 10 = \underline{\quad}$
④ $90 + 10 = \underline{\quad}$ ⑤ $37 + 10 = \underline{\quad}$ ⑥ $461 + 10 = \underline{\quad}$
⑦ $542 + 10 = \underline{\quad}$ ⑧ $336 + 10 = \underline{\quad}$ ⑨ $775 + 10 = \underline{\quad}$
⑩ $569 + 100 = \underline{\quad}$ ⑪ $5 + 100 = \underline{\quad}$ ⑫ $78 + 100 = \underline{\quad}$
⑬ $231 + 100 = \underline{\quad}$ ⑭ $26 + 100 = \underline{\quad}$ ⑮ $899 + 100 = \underline{\quad}$
⑯ $112 + 100 = \underline{\quad}$ ⑰ $619 + 100 = \underline{\quad}$ ⑱ $228 + 100 = \underline{\quad}$

Subtract.

- ⑲ $18 - 10 = \underline{\quad}$ ⑳ $65 - 10 = \underline{\quad}$ ㉑ $143 - 10 = \underline{\quad}$
㉒ $78 - 10 = \underline{\quad}$ ㉓ $422 - 10 = \underline{\quad}$ ㉔ $123 - 10 = \underline{\quad}$
㉕ $189 - 10 = \underline{\quad}$ ㉖ $465 - 10 = \underline{\quad}$ ㉗ $38 - 10 = \underline{\quad}$
㉘ $210 - 100 = \underline{\quad}$ ㉙ $102 - 100 = \underline{\quad}$ ㉚ $377 - 100 = \underline{\quad}$
㉛ $543 - 100 = \underline{\quad}$ ㉜ $446 - 100 = \underline{\quad}$ ㉝ $522 - 100 = \underline{\quad}$
㉞ $725 - 100 = \underline{\quad}$ ㉟ $614 - 100 = \underline{\quad}$ ㊱ $863 - 100 = \underline{\quad}$