

Day 9

****Each day you should be reading at least 20 minutes for your reading log. In addition, login to IXL for Math, Foundations and Language Practice for 15 mins per day.**

Reading:	ReadWorks Article and questions
Writing:	Writing Prompt - Choose 1 to write about
Math:	Choose at least 3 sheets to complete
Science/SS:	ReadWorks article and questions
Foundations:	Endings worksheet

All About Bats

The Amazing World of Bats

Bats are interesting creatures.

Bats are shy and gentle animals. Some people are afraid of bats. That is usually because they don't know these facts about bats.

Bats are mammals

Bats are the only mammals that can fly. A mammal is a warm-blooded animal that has fur or hair on its body. Female mammals feed their babies milk from their bodies. A baby bat is called a pup.



Konrad Wothe/Getty Images

Bats are night animals

Bats are nocturnal. That means they sleep during the day and are active at night. Bats sleep hanging upside down. Most bats live in caves and trees. A bat's home is called a roost.

Bats are helpers

Most bats feed on insects. One bat can eat hundreds of insects in an hour! Without bats, those insects would eat crops that farmers grow.

Some bats eat fruits. They drop seeds in different places. That helps new plants grow.

Name: _____ Date: _____

1. In what position do bats sleep?

2. Where do most bats live?

3. Why could bats be considered helpers?


4. What is this passage mostly about?

5. The question below is an incomplete sentence. Choose the word that best completes the sentence.

Bats can fly, _____ other mammals cannot.

- A. because
- B. but
- C. so

6. Which animal is NOT nocturnal?



Day 9: Lists

- 1.**List as many things you can think of to do on a rainy day.
- 2.**List the ingredients you would need to make your favorite cookies.
- 3.**You are going on vacation, write a list of the things you would need to pack.
- 4.**Free choice.

***Use the graphic organizer as needed.**

Name: _____

Date: _____



1. _____

2. _____

3. _____

4. _____

5. _____

6. _____

7. _____

8. _____

9. _____

10. _____

Name: _____


Date: _____

Handwriting practice lines consisting of 18 rows. Each row has a solid top line, a dashed middle line, and a solid bottom line. On the left side of each row, there are three small cartoon icons: a girl's face, a hand holding a pencil, and a girl's face.

Name: _____

Date: _____





1 How much money is shown?

Ⓟ Ⓟ Ⓝ Ⓝ Ⓝ ⓓ Ⓠ Ⓠ

_____¢

MRB
110-111

2 Fill in the rule and the missing numbers.

Rule	in	out
	42	52
	11	21
		108
	74	

MRB
56-57

3 Which numbers are larger than 750? Fill in the bubbles next to the correct answers.

- 749
- 801
- 751
- 738

MRB
74

4 Write six names for 50.

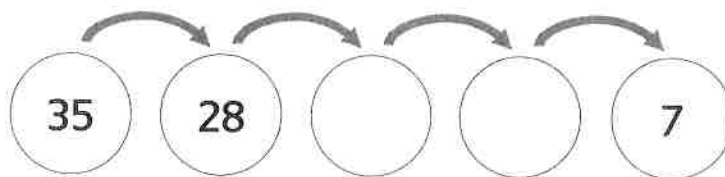
50

MRB
53

5 Fill in the empty frames.

Rule

-7



MRB
54-55

1 Which set of numbers is ordered from smallest to largest? Fill in the circle next to the correct answer.

- (A) 123, 68, 32, 25, 4
- (B) 4, 25, 32, 68, 123
- (C) 4, 32, 25, 68, 123
- (D) 32, 4, 123, 25, 68

MRB
74

2 Count on by 10s.

360, _____, _____, _____,
_____, 410, _____

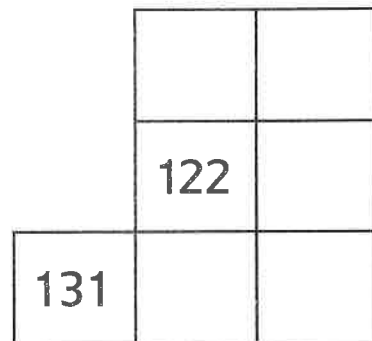
MRB
66

3 Write six names for 25.

25

MRB
53

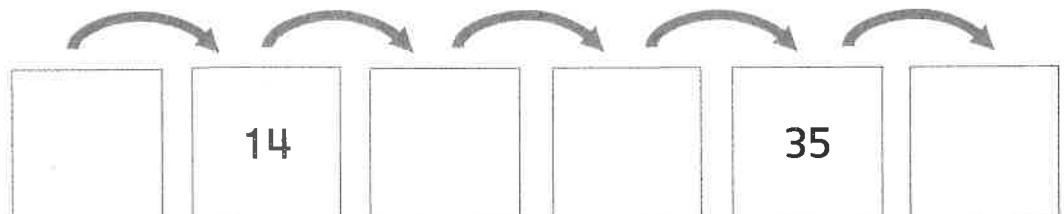
4 Fill in the missing numbers.



5 Fill in the empty frames. You may use your math tools to help.

Rule

+ 7



MRB
54-55

1 Write $<$, $>$, or $=$.

$$6 + 7 \quad \underline{\hspace{1cm}} \quad 15 - 4$$

$$5 + 8 \quad \underline{\hspace{1cm}} \quad 8 + 5$$

$$18 - 9 \quad \underline{\hspace{1cm}} \quad 5 + 5$$

MRB
75

2 How many cents are there?

Ⓟ Ⓟ Ⓣ Ⓣ Ⓠ Ⓠ Ⓠ

Fill in the circle next to the answer.

Ⓐ 97¢


Ⓑ 75¢

Ⓒ 52¢

Ⓓ 67¢

MRB
110-111

3



How many dots are there in all?

Answer: _____

Odd or even? _____

MRB
59-60

4

Write the label for the name-collection box. Add three more names to the box.

17 - 1

18 - 2

sixteen

MRB
53

5 Fill in the empty frames.

Rule

+ 10

20

40

70

MRB
54-55

Math Boxes

Day 9

- 1 Circle the expanded form that shows the smaller number.

$$600 + 90 + 5$$

$$600 + 80 + 8$$

MRB
74

- 2 Estimate the length of this line segment in centimeters:

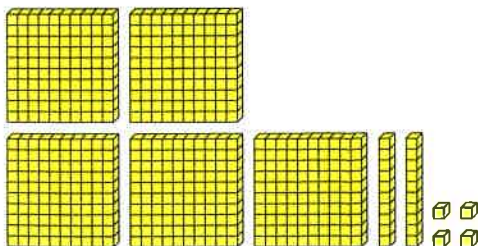
About _____ centimeters

Use your centimeter ruler.
Measure the length of the line segment.

About _____ centimeters

MRB
102, 104

- 3 Write the number.



MRB
72, 73

- 4 What time is it? Fill in the bubble next to the best answer.



6:25

6:30

6:35

7:35

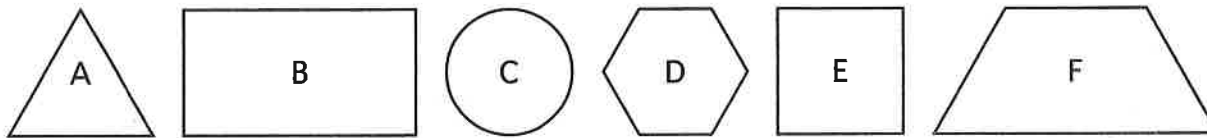
MRB
106-107

- 5 Mark 88 in the correct spot on the number line.



Practice Set 70

Day 9



- ① Which shapes are quadrilaterals? _____, _____, and _____
- ② Which shapes have right angles? _____ and _____
- ③ Which shapes have at least one pair of parallel sides?
_____, _____, _____, and _____
- ④ Shape D has _____ vertices.
- ⑤ Shape A has _____ sides.
- ⑥ Shape B has _____ angles.
- ⑦ Shape F is called a (circle one): triangle hexagon trapezoid

Subtract.

- ⑧ $17 - 8 =$ _____
- ⑨ $6 - 3 =$ _____
- ⑩ _____ $= 16 - 8$
- ⑪ $10 - 3 =$ _____
- ⑫ _____ $= 9 - 6$
- ⑬ $14 - 7 =$ _____
- ⑭ _____ $= 9 - 4$
- ⑮ $3 - 0 =$ _____
- ⑯ _____ $= 6 - 4$
- ⑰ $13 - 7 =$ _____
- ⑱ $14 - 6 =$ _____
- ⑲ _____ $= 18 - 9$

My Bean Plant

by Rachelle Kreisman



My grandfather loves to grow plants. He raises vegetables and fruits, and he takes great care of all of them. Last week, Grandpa gave me some green bean seeds. Now I can grow my own green bean plant.

I brought my seeds home and showed my mom. She helped me get my green bean project ready. First, we put some soil in a pot. Then we planted a few seeds. I remembered that Grandpa told me that plants depend on water and sunlight to grow. So I put the pot in a sunny spot by the window,

and I added some water.

I checked on my plant every day. When the soil felt dry, I added more water. Today, I saw a tiny stem. The plant is growing! Over the next few weeks, more stems and leaves will grow. Then flowers will grow, too.

What am I most excited about? I cannot wait to eat the beans! I think they will taste even better because I grew them myself.

Name: _____ Date: _____

1. What did Grandpa give to the main character?

- A. some green beans
- B. green bean seeds
- C. a fully-grown bean plant

2. The main character planted the seeds, put the pot in a sunny spot, and added water.

What was the effect of these actions?

- A. The soil got dry right away.
- B. A tiny stem grew after some time.
- C. The seeds quickly turned into green beans.

3. Read these sentences from the text.

"I put the pot in a sunny spot by the window, and I added some water.

"I checked on my plant every day. When the soil felt dry, I added more water. Today, I saw a tiny stem. The plant is growing!"

What conclusion can you draw from this evidence?

- A. The main character has taken care of many different plants in the past.
- B. The main character is doing a good job of taking care of the bean plant.
- C. The main character doesn't really care about the bean plant.

4. Read these sentences from the text.

"I cannot wait to eat the beans! I think they will taste even better because I grew them myself."

Why might the main character think the beans will taste even better because he or she grew them?

- A. because the main character normally hates the taste of green beans
- B. because the main character is way better at growing plants than Grandpa
- C. because the main character put work into taking care of the beans

5. What is the main idea of this story?

- A. The main character takes care of a green bean seed and helps it start growing into a plant.
- B. The main character's grandfather loves to grow vegetables, and he takes great care of all his plants.
- C. The main character is excited to eat green beans because they are a tasty vegetable.

6. Read these sentences from the text.

"I remembered that Grandpa told me that plants depend on water and sunlight to grow. So I put the pot in a sunny spot by the window, and I added some water.

"I checked on my plant every day. When the soil felt dry, I added more water. Today, I saw a tiny stem. The plant is growing!"

Based on this text, what does the phrase "depend on" most closely mean?

- A. need
- B. like
- C. change

7. Read these sentences from the text.

"I remembered that Grandpa told me that plants depend on water and sunlight to grow. So I put the pot in a sunny spot by the window, and I added some water."

Now read this sentence about the same information. Then, choose the answer that completes the sentence without changing the meaning from the story.

I put the pot in a sunny spot by the window, and I added some water _____
Grandpa told me that plants depend on water and sunlight to grow.

- A. so
- B. because
- C. but

8. What do plants need so they can grow?

9. What are two things the main character did to the bean plant to help it grow?

10. What would happen to the bean plant if the main character forgot to give it water?
Use evidence from the text to support your answer.

Name: _____ Date: _____



Practice Time



Directions: Add an **s** or **z** to complete each word.

*Remember to carefully look at each word to see if it looks right.

1. ri__e	2. the__e	3. bla__e	4. ro__e
5. ma__e	6. cho__e	7. fro__e	8. no__e

Directions: Read the words in the box below and sort by the sound of **s**.

Cut and paste the words under the correct column.

*Remember that **s** can say /s/ or /z/ when it's between two vowels.

/s/	/z/

chase	nose	vase	close
case	hose	rose	base