

1st Grade Work Directions:

DAY 9

FUNDATIONS:

1. Choose and complete ONE menu item
2. Practice reading and writing the trick words provided.
3. Write 3 sentences **daily** using the trick word list.

READING:

1. Login to RAZ-Kids (go to www.fpsk6.org then go to students, then RAZ-kids) choose books and read for 20 minutes.
2. Complete the questions that follow each book. (green check marks will appear when complete)

WRITING:

1. Complete 1 writing assignment per day from the Writing Menu. Remember to use capitalization, punctuation and your best spelling.
2. Use the paper provided.

MATH:

1. Play today's game
2. Complete the worksheet provided
3. Log in to IXL (see directions) and complete 20 minutes of activities per day.


SCIENCE:

1. Continue to Observe the moon and fill out the calendar.
2. Complete "Moon Phases" worksheet

GUIDED READING:

1. Choose a new NON-Fiction book from your home library or a RAZ-kids book and read for 15 minutes.
2. Write 3 facts about your topic.

Foundations Menu

Write 6 of your words and "mark" them.	Trace 6 of your words on someone's back! *parent signature	Have someone scramble your words- then unscramble them next to it.	Hidden words: Use a white crayon to write 5 of your words. Color over in marker to reveal!
Pick 6 words and write them in sentences. Use capital letters and punctuation.	Be the TEACHER- show someone at home how to tap out 5 words. *Parent signature	Write 6 of your words 3 times each.	Write 6 of your words in shaving cream. * parent signature
Build your words with the yellow tiles. *parent signature	Write your words and then a rhyming word next to it.	Triangle Write 5 of your words! Example: DOG D Do Dog	Draw a picture to represent each word. Dog= 

A B C D E F G H I J K L M N O P Q R S T U V W X Y Z

Week 1 Words

stick	lost	fast	belt	crab
crop	flat	blush	slam	test

Week 2 Words

dress	still	clams	drips	flags
helps	pinch	bench	stuff	pumps

First Grade Foundations Trick Words by Unit

Please help your child learn to read and spell these tricky words ☺ A checkmark signifies that they know how to Read (R) and/or Spell (S) the word. Thank you for your help!

Unit 2	R	S
the		
a		
and		
is		
his		
of		

Unit 5	R	S
from		
have		
do		
does		

Unit 8	R	S
would		
could		
should		
her		
over		
number		

Unit 3	R	S
as		
has		
to		
into		
we		
he		
she		
be		
me		
for		
or		

Unit 6	R	S
were		
are		
who		
what		
when		
where		
there		
here		

Unit 7	R	S
why		
by		
my		
try		
put		
two		
too		
very		
also		
some		
come		

Unit 4	R	S
you		
your		
I		
they		
was		
one		
said		

Writing Menu

- * Please date the box for the daily activity you choose
- * Please choose ONE activity PER day
- * Remember to use capitalization and punctuation.

<div style="border: 1px solid black; width: 40px; height: 20px; margin-bottom: 5px;"></div> I am proud of myself because...	<div style="border: 1px solid black; width: 40px; height: 20px; margin-bottom: 5px;"></div> Pretend you are in charge at home! Write about your day.	<div style="border: 1px solid black; width: 40px; height: 20px; margin-bottom: 5px;"></div> If you could travel somewhere warm and sunny, where would you go.	<div style="border: 1px solid black; width: 40px; height: 20px; margin-bottom: 5px;"></div> Do you have a nickname? If so, how did you get that name?
<div style="border: 1px solid black; width: 40px; height: 20px; margin-bottom: 5px;"></div> If you had a superpower, it would be....	<div style="border: 1px solid black; width: 40px; height: 20px; margin-bottom: 5px;"></div> Would you rather order lunch at school or bring lunch from home? Why?	<div style="border: 1px solid black; width: 40px; height: 20px; margin-bottom: 5px;"></div> What is your favorite season? Why?	<div style="border: 1px solid black; width: 40px; height: 20px; margin-bottom: 5px;"></div> Write two things you like and two things you dislike about rainy days?
<div style="border: 1px solid black; width: 40px; height: 20px; margin-bottom: 5px;"></div> Write 3 things you like BEST about your school day.	<div style="border: 1px solid black; width: 40px; height: 20px; margin-bottom: 5px;"></div> If you could grow anything in your backyard what would it be? Why?	<div style="border: 1px solid black; width: 40px; height: 20px; margin-bottom: 5px;"></div> Write about a sport you like to play or one you like to watch.	<div style="border: 1px solid black; width: 40px; height: 20px; margin-bottom: 5px;"></div> What is your favorite animal to see (at the zoo, farm, etc.) and why?


WORD BANK

because like from too would here there could
does also your where teacher

Date:

Name:

Journal writing



Journal writing lines with decorative icons on the left margin.

Journal Writing

Name: _____

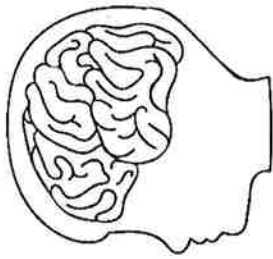
Date: _____



"Using Tens" Addition Facts

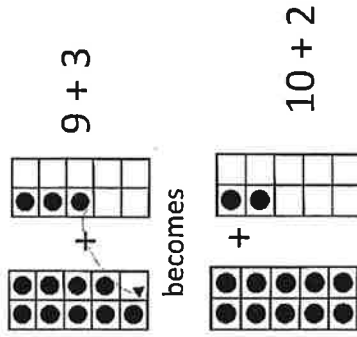
DIRECTIONS: Take turns naming a sum and covering the fact. Whoever gets four in a row first, wins!

9 + 2	8 + 3	7 + 4	5 + 6	8 + 9	9 + 8	9 + 9
8 + 5	9 + 3	4 + 7	8 + 6	9 + 7	8 + 8	5 + 7
5 + 6	9 + 5	9 + 4	8 + 5	4 + 7	9 + 8	9 + 4
9 + 6	9 + 5	8 + 4	7 + 5	9 + 7	8 + 7	8 + 8
6 + 5	8 + 5	8 + 4	9 + 6	6 + 5	9 + 3	9 + 9
8 + 6	7 + 5	8 + 7	9 + 2	8 + 9	8 + 3	7 + 4



Think!

Think of two ten frames. Can you move some from one to the other to make an easier problem?



$10 + 2$

Does knowing a Make 10 fact help you solve the problem?

$7 + 4 = ?$

I know $7 + 3 = 10$.
4 is one more than 3.
The answer must be one more than 10. $7 + 4 = 11$.

Solve each problem. Circle the problems in each row with differences equal to the number on the star.



$$\begin{array}{r} 19 \\ - 3 \\ \hline \end{array}$$

$$\begin{array}{r} 12 \\ - 1 \\ \hline \end{array}$$

$$\begin{array}{r} 18 \\ - 2 \\ \hline \end{array}$$

$$\begin{array}{r} 17 \\ - 5 \\ \hline \end{array}$$



$$\begin{array}{r} 18 \\ - 4 \\ \hline \end{array}$$

$$\begin{array}{r} 24 \\ - 4 \\ \hline \end{array}$$

$$\begin{array}{r} 19 \\ - 5 \\ \hline \end{array}$$

$$\begin{array}{r} 19 \\ - 4 \\ \hline \end{array}$$



$$\begin{array}{r} 19 \\ - 1 \\ \hline \end{array}$$

$$\begin{array}{r} 19 \\ - 2 \\ \hline \end{array}$$

$$\begin{array}{r} 18 \\ - 7 \\ \hline \end{array}$$

$$\begin{array}{r} 18 \\ - 1 \\ \hline \end{array}$$



$$\begin{array}{r} 19 \\ - 4 \\ \hline \end{array}$$

$$\begin{array}{r} 13 \\ - 0 \\ \hline \end{array}$$

$$\begin{array}{r} 12 \\ - 1 \\ \hline \end{array}$$

$$\begin{array}{r} 18 \\ - 5 \\ \hline \end{array}$$





Student Activity Sheet 5C: Phases of the Moon

Name: _____

Date: _____

The Moon seems to change shape. That is because the light from the Sun is illuminating only a portion of the Moon.

Draw one picture in each box to show the different phases of the Moon.




The Moon revolves around Earth. How long does it take for the Moon to revolve around Earth and go through all its phases once?

Name: _____

Date: _____

Nonfiction



Handwriting practice lines consisting of 12 rows. Each row features a small cartoon character icon on the left, followed by a solid top line, a dashed middle line, and a solid bottom line.